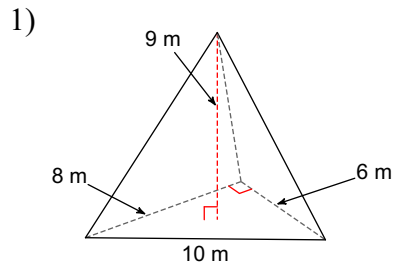
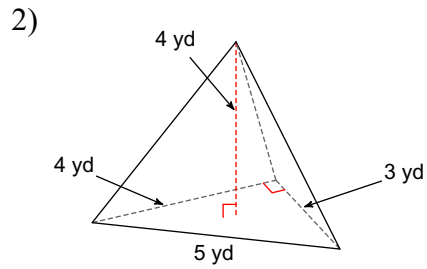


5.6 - Practice - Pyramids & Cones

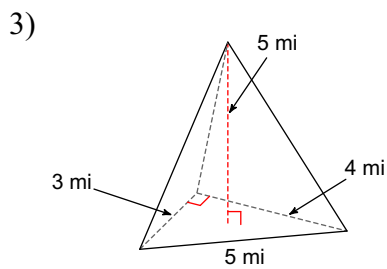
Find the volume of each figure. Round your answers to the nearest tenth, if necessary.



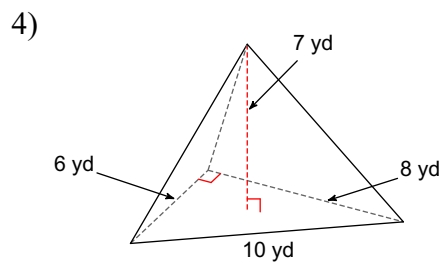
72 m^3



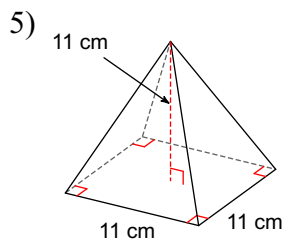
8 yd^3



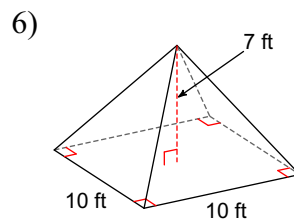
10 mi^3



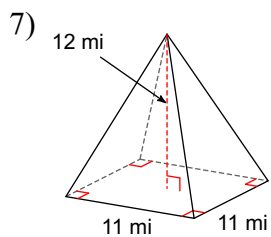
56 yd^3



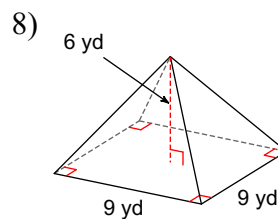
443.7 cm^3



233.3 ft^3

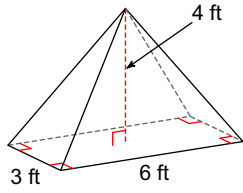


484 mi^3



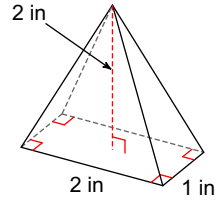
162 yd^3

9)



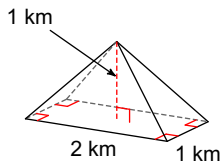
24 ft^3

10)



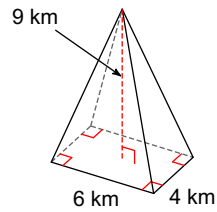
1.3 in^3

11)



0.7 km^3

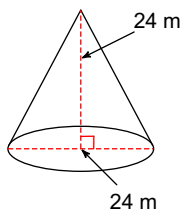
12)



72 km^3

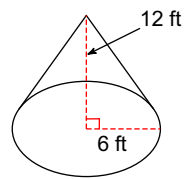
Find the volume of each figure. Leave your answers in terms of π .

13)



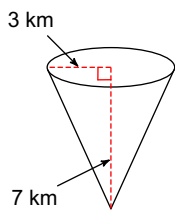
$1152\pi \text{ m}^3$

14)



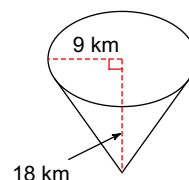
$144\pi \text{ ft}^3$

15)



$21\pi \text{ km}^3$

16)



$486\pi \text{ km}^3$